

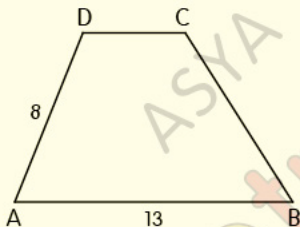


M
A
T
E
M
A
T
i
K

_ YAMUK

_ TEST1

1.



ABCD yamuk, $[AB] \parallel [DC]$

$m(\widehat{ADC}) = 2m(\widehat{CBA})$, $|AB| = 13$ cm, $|AD| = 8$ cm

Yukarıdaki verilere göre, $|DC|$ kaç cm dir?

A) 3

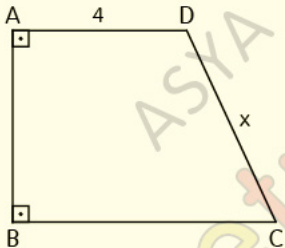
B) 4

C) 5

D) 6

E) 7

2.



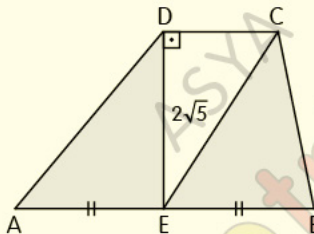
ABCD dik yamuk, $|AB|^2 + |BC|^2 = 8|BC|$,

$|AD| = 4$ cm, $|DC| = x$

Yukarıdaki verilere göre, x kaç cm dir?

- A) 4 B) 5 C) 6 D) 7 E) 8

3.



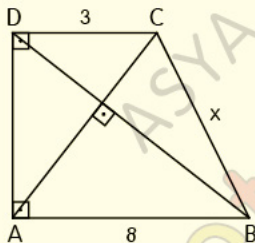
ABCD yamuk, $[ED] \perp [DC]$,

$|AE| = |EB|$, $2|DA| = 3|EB|$, $|DE| = 2\sqrt{5}$ cm

Yukarıdaki verilere göre, taralı alanların toplamı kaç cm^2 dir?

- A) $4\sqrt{5}$ B) 10 C) $4\sqrt{10}$ D) 15 E) $8\sqrt{5}$

4.



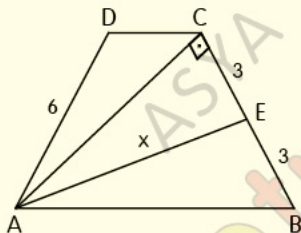
ABCD dik yamuk, $[DB] \perp [AC]$,

$|AB| = 8$ cm, $|DC| = 3$ cm, $|BC| = x$

Yukarıdaki verilere göre, x kaç cm dir?

- A) $\frac{7}{2}$ B) $\frac{9}{2}$ C) $\frac{11}{2}$ D) 6 E) 7

5.



ABCD yamuk, $[AC] \perp [CB]$, $|AB| = 3|DC|$

$|CE| = |EB| = 3$ cm, $|AD| = 6$ cm, $|AE| = x$

Yukarıdaki verilere göre, x kaç cm dir?

A) 8

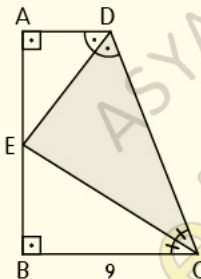
B) 9

C) 10

D) 12

E) 16

6.



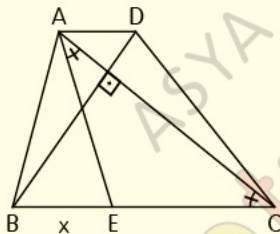
ABCD dik yamuk, $m(\widehat{ADE}) = m(\widehat{EDC})$,

$m(\widehat{DCE}) = m(\widehat{ECB})$, $|BC| = 9$ cm, $|AB| = 12$ cm

Yukarıdaki verilere göre, $A(ECD)$ kaç cm^2 dir?

- A) 36 B) 37 C) 38 D) 39 E) 40

7.

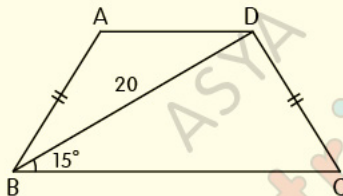


ABCD yamuk, $[BD] \perp [AC]$, $m(\widehat{EAC}) = m(\widehat{ACE})$,
 $|BC| = 4|AD|$, $|DB| = 6$ cm, $|AC| = 8$ cm

Yukarıdaki verilere göre, $|BE| = x$ kaç cm dir?

- A) 2 B) $\frac{5}{2}$ C) 3 D) $\frac{7}{2}$ E) 4

8.



ABCD ikizkenar yamuk,

$|AB| = |DC|$, $|DB| = 20$ cm, $m(\widehat{CBD}) = 15^\circ$

Yukarıdaki verilere göre, $A(ABCD)$ kaç cm^2 dir?

A) 75

B) 80

C) 90

D) 100

E) 110

CEVAP ANAHTARI

Yamuk Test-1

1-C 2-A 3-E 4-E 5-B 6-D 7-C 8-D

ETİKETLER

matematik test çözümleri, geometri soru bankası pdf, geometri soru bankası pdf indir, geometri pdf indir, geometri soru bankası çözümleri, matematik pdf, tyt matematik pdf indir, yks matematik pdf indir, matematik test pdf, yks matematik pdf, geometri pdf soru bankası, geometri pdf test, geometri çözümlü sorular pdf, geometri yamuk test, yamuk test pdf, özel dörtgenler test pdf, yks 2020, yks 2020 pdf, tyt 2020, tyt 2020 pdf, tyt-ayt 2020, dersimiz, dersimiz geometri, asya geometri, ali selim yaman